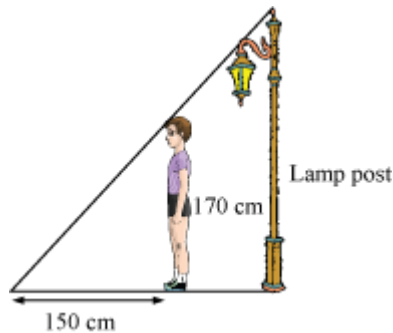


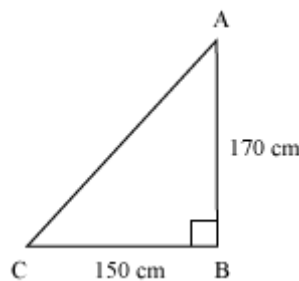
Introduction to Trigonometry

Trigonometric Ratios

Suppose a boy is standing in front of a lamp post at a certain distance. The height of the boy is 170 cm and the length of his shadow is 150 cm.



You can see from the above figure that the boy and his shadow form a right-angled triangle as shown in the figure below.



The ratio of the height of the boy to his shadow is 170:150 i.e., 17:15.

Is this ratio related to either of the angles of $\triangle ABC$?

We can also conclude the following:

$$\cos A = \frac{1}{\sec A}, \tan A = \frac{1}{\cot A}$$

Also, note that

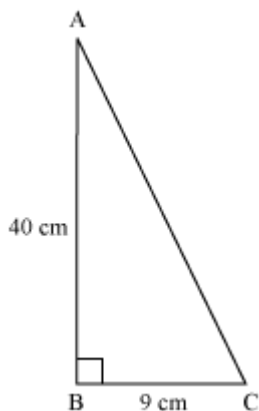
$$\tan A = \frac{\sin A}{\cos A} \text{ and } \cot A = \frac{\cos A}{\sin A}$$

Let us now solve some more examples based on trigonometric ratios.

Example 1: In a triangle ABC, right-angled at B, side AB = 40 cm and BC = 9 cm. Find the value of $\sin A$, $\cos A$, and $\tan A$.

Solution:

It is given that AB = 40 cm and BC = 9 cm



Using Pythagoras theorem in $\triangle ABC$, we obtain

$$(AC)^2 = (AB)^2 + (BC)^2$$

$$(AC)^2 = (40)^2 + (9)^2$$

$$(AC)^2 = 1600 + 81$$

$$(AC)^2 = 1681$$

$$(AC)^2 = (41)^2$$

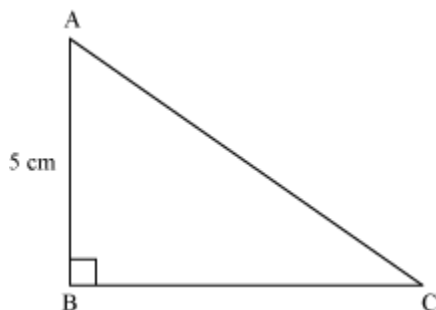
$$AC = 41 \text{ cm}$$

$$\text{Now, } \sin A = \frac{BC}{AC} = \frac{9}{41}$$

$$\cos A = \frac{AB}{AC} = \frac{40}{41}$$

$$\tan A = \frac{BC}{AB} = \frac{9}{40}$$

Example 2: From the given figure, find the values of cosec C and cot C, if $AC = BC + 1$.



Solution:

Now, it is given that $AB = 5$ cm and

$$AC = BC + 1 \dots (1)$$

By Pythagoras theorem, we obtain

$$(AB)^2 + (BC)^2 = (AC)^2$$

$$\Rightarrow (AC)^2 - (BC)^2 = (AB)^2$$

$$\Rightarrow (BC + 1)^2 - (BC)^2 = (5)^2 \text{ [Using (1)]}$$

$$\Rightarrow (BC)^2 + 1 + 2BC - (BC)^2 = 25$$

$$\Rightarrow 2BC = 25 - 1$$

$$\Rightarrow 2BC = 24$$

$$\Rightarrow BC = 12 \text{ cm}$$

$$\therefore AC = 12 + 1 = 13 \text{ cm}$$

$$\text{Thus, } \operatorname{cosec} C = \frac{AC}{AB}$$

$$= \frac{13}{5}$$

$$\text{And, } \cot C = \frac{BC}{AB}$$

$$= \frac{12}{5}$$

Example 3: In a right-angled triangle ABC, which is right-angled at B, $\tan A = \frac{12}{5}$. Find the value of $\cos A$ and $\sec A$.

Solution:



It is given that $\tan A = \frac{12}{5}$

We know that $\tan A = \frac{BC}{AB}$

$$\Rightarrow \frac{BC}{AB} = \frac{12}{5}$$

Let $BC = 12k$ and $AB = 5k$

Using Pythagoras theorem in $\triangle ABC$, we obtain

$$(AC)^2 = (AB)^2 + (BC)^2$$

$$= (5k)^2 + (12k)^2$$

$$= 25k^2 + 144k^2$$

$$(AC)^2 = 169k^2$$

$$AC = 13k$$

$$\text{Now, } \cos A = \frac{\text{Side adjacent to } \angle A}{\text{Hypotenuse}}$$

$$= \frac{5k}{13k}$$

$$= \frac{5}{13}$$

$$\sec A = \frac{1}{\cos A}$$

$$= \frac{1}{\frac{5}{13}}$$

$$= \frac{13}{5}$$

Use Trigonometric Ratios In Solving Problems

If we know the value of a trigonometric ratio, then we can find the values of other trigonometric ratios and the value of any expression involving these trigonometric ratios.

Example1: If $\cot A = \frac{1}{3}$, then find the value of $\frac{\tan^2 A - 1}{\tan^2 A + 1}$.

Solution:

It is given that $\cot A = \frac{1}{3}$.

We know that

$$\tan A = \frac{1}{\cot A}$$

$$= \frac{1}{\frac{1}{3}}$$

$$\tan A = 3$$

$$\text{Then, } \frac{\tan^2 A - 1}{\tan^2 A + 1} = \frac{(3)^2 - 1}{(3)^2 + 1}$$

$$= \frac{9-1}{9+1}$$

$$= \frac{8}{10}$$

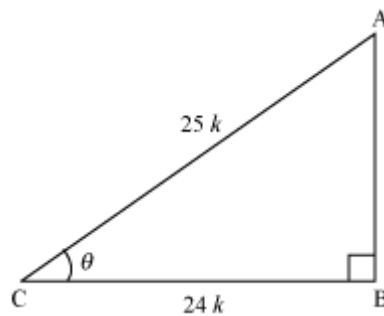
$$= \frac{4}{5}$$

Example 2: Find the value of $(\sin^2 \theta + \cos^2 \theta)$, if $\sec \theta = \frac{25}{24}$.

Solution:

$$\text{We have } \sec \theta = \frac{25}{24} \dots (i)$$

$$\text{We know that } \sec \theta = \frac{\text{Hypotenuse}}{\text{Side adjacent to } \theta}$$



Let ABC be a triangle in which $\angle C = \theta$, therefore we have

$$\sec \theta = \frac{AC}{BC} \dots (ii)$$

From equations (i) and (ii), we have

$$\frac{AC}{BC} = \frac{25}{24}$$

Let us take $AC = 25k$ and $BC = 24k$.

Using Pythagoras theorem, we have,

$$(AC)^2 = (AB)^2 + (BC)^2$$

$$(25k)^2 = (AB)^2 + (24k)^2$$

$$625k^2 = (AB)^2 + 576k^2$$

$$AB^2 = (625 - 576)k^2$$

$$AB^2 = 49k^2$$

$$AB = 7k$$

$$\therefore \sin \theta = \frac{AB}{AC}$$

$$= \frac{7k}{25k}$$

$$= \frac{7}{25}$$

$$\cos \theta = \frac{BC}{AC}$$

$$= \frac{24k}{25k}$$

$$= \frac{24}{25}$$

$$\text{Now, } \sin^2 \theta + \cos^2 \theta = \left(\frac{7}{25}\right)^2 + \left(\frac{24}{25}\right)^2$$

$$= \frac{49}{625} + \frac{576}{625}$$

$$= \frac{625}{625}$$

$$= 1$$

$$\therefore \sin^2 \theta + \cos^2 \theta = 1$$

Trigonometric Ratios Of Some Specific Angles

Trigonometric ratios of some common angles such as 0° , 45° , 90° , etc. are used very often in solving trigonometric questions.

Example 1: Find the value of $\cos 2A$ if $A = 30^\circ$.

Solution:

It is given that

$$A = 30^\circ$$

$$\therefore \cos 2A = \cos (2 \times 30^\circ)$$

$$= \cos 60^\circ$$

$$= \frac{1}{2}$$

Example 2: Prove that $\sin 2A = 2 \sin A \cos A$, for $A = 45^\circ$.

Solution:

$$\text{L.H.S} = \sin 2A = \sin (2 \times 45^\circ)$$

$$= \sin 90^\circ$$

$$= 1$$

$$\text{R.H.S.} = 2 \sin A \cos A = 2 \times \sin 45^\circ \times \cos 45^\circ$$

$$= 2 \times \frac{1}{\sqrt{2}} \times \frac{1}{\sqrt{2}}$$

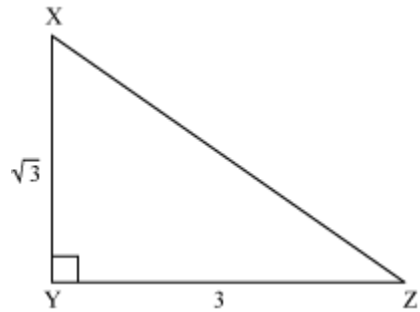
$$= 1$$

$$\text{L.H.S} = \text{R.H.S.}$$

$$\therefore \sin 2A = 2 \sin A \cos A$$

Example 3: From the given figure XYZ, find $\angle YZX$ and $\angle ZXY$.





Solution:

It is given that $XY = \sqrt{3}$ and $YZ = 3$

$$\text{Now, } \frac{XY}{YZ} = \tan Z$$

$$\Rightarrow \tan Z = \frac{\sqrt{3}}{3} = \frac{1}{\sqrt{3}}$$

$$\therefore \angle YZX = 30^\circ$$

By angle sum property in $\triangle XYZ$, we obtain

$$\angle ZXY = 180^\circ - 30^\circ - 90^\circ$$

$$\therefore \angle ZXY = 60^\circ$$

Example 4: If $\sin (A + B) = 1$ and $\tan (A - B) = 0$, where $0^\circ < A + B \leq 90^\circ$, then find A and B.

Solution:

$$\sin (A + B) = 1,$$

We know that $\sin 90^\circ = 1$

$$\Rightarrow A + B = 90^\circ \dots (1)$$

$$\tan (A - B) = 0$$

And, we know that $\tan 0^\circ = 0$

$$\Rightarrow A - B = 0^\circ \dots (2)$$

On adding (1) and (2), we obtain

$$2A = 90^\circ$$

$$\Rightarrow A = 45^\circ$$

On putting this value of A in (1), we obtain

$$B = 45^\circ$$

Thus, the value of both A and B is 45° .

$$\frac{\sin A \cos B + \cos A \sin B}{\cos A \cos B + \sin A \sin B}$$

Example 5: Find the value of $\cos A \cos B + \sin A \sin B$, if $A = 60^\circ$ and $B = 30^\circ$.

Solution:

$$\frac{\sin A \cos B + \cos A \sin B}{\cos A \cos B + \sin A \sin B} = \frac{\sin 60^\circ \cos 30^\circ + \cos 60^\circ \sin 30^\circ}{\cos 60^\circ \cos 30^\circ + \sin 60^\circ \sin 30^\circ}$$

$$\frac{\frac{\sqrt{3}}{2} \times \frac{\sqrt{3}}{2} + \frac{1}{2} \times \frac{1}{2}}{\frac{1}{2} \times \frac{\sqrt{3}}{2} + \frac{\sqrt{3}}{2} \times \frac{1}{2}}$$

$$= \frac{\frac{3}{4} + \frac{1}{4}}{\frac{\sqrt{3}}{4} + \frac{\sqrt{3}}{4}}$$

$$= \frac{\frac{4}{4}}{\frac{2\sqrt{3}}{4}}$$

$$= \frac{2}{\sqrt{3}}$$

Example 6: Find the value of $\sin^2 60^\circ + 2 \cos^2 30^\circ - \tan^2 45^\circ + \sec^2 30^\circ$

Solution:

$$\sin^2 60^\circ + 2 \cos^2 30^\circ - \tan^2 45^\circ + \sec^2 30^\circ$$

$$= \left(\frac{\sqrt{3}}{2}\right)^2 + 2\left(\frac{\sqrt{3}}{2}\right)^2 - (1)^2 + \left(\frac{2}{\sqrt{3}}\right)^2$$

$$= \frac{3}{4} + 2 \times \frac{3}{4} - 1 + \frac{4}{3}$$

$$= \frac{31}{12}$$

Example 7: If $\sin x = \sin 60^\circ \cos 30^\circ + \cos 60^\circ \sin 30^\circ$ then find the value of x .

Solution:

We have

$$\sin x = \sin 60^\circ \cos 30^\circ + \cos 60^\circ \sin 30^\circ$$

$$\Rightarrow \sin x = \frac{\sqrt{3}}{2} \times \frac{\sqrt{3}}{2} + \frac{1}{2} \times \frac{1}{2}$$

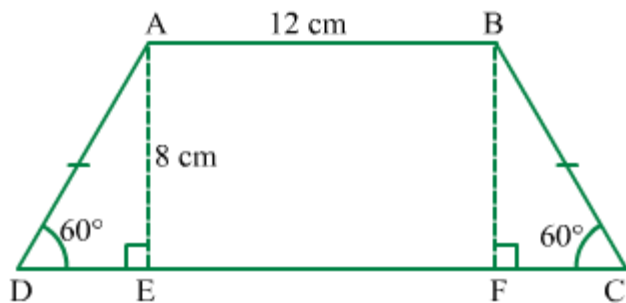
$$\Rightarrow \sin x = \frac{3}{4} + \frac{1}{4}$$

$$\Rightarrow \sin x = 1$$

$$\Rightarrow \sin x = \sin 90^\circ$$

$$\Rightarrow x = 90^\circ$$

Example 8: ABCD is a trapezium such that $AB \parallel CD$ and $AD = BC$.



Find the area of the trapezium.

Solution:

In right-angled $\triangle AED$, we have

$$\tan 60^\circ = \frac{AE}{ED}$$

$$\Rightarrow ED = \frac{AE}{\tan 60^\circ}$$

$$\Rightarrow ED = \frac{8}{\sqrt{3}} \text{ cm}$$

In $\triangle AED$ and $\triangle BFC$, we have

$$AD = BC$$

$$\angle AED = \angle BEC = 90^\circ \text{ and}$$

$$AE = BF \quad (\text{Perpendiculars drawn between two parallel lines})$$

$$\therefore \triangle AED \cong \triangle BFC$$

By CPCT, we have

$$ED = FC = 8\sqrt{3} \text{ cm}$$

ABFE is a rectangle, so we have

$$AB = FE = 12 \text{ cm}$$

$$\text{Now, } DC = ED + FE + FC = \frac{8}{\sqrt{3}} \text{ cm} + 12 \text{ cm} + \frac{8}{\sqrt{3}} \text{ cm} = \left(12 + \frac{16}{\sqrt{3}}\right) \text{ cm}$$

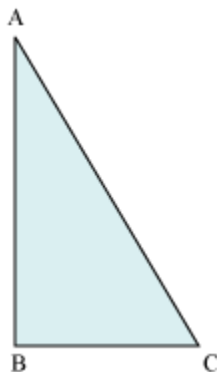
$$\text{Area of trapezium } ABCD = (AB + DC) \times AE$$

$$\begin{aligned} &= \left\{ \frac{1}{2} \times \left(12 + 12 + \frac{16}{\sqrt{3}} \right) \times 8 \right\} \text{ cm}^2 \\ &= \left\{ \left(24 + \frac{16}{\sqrt{3}} \right) \times 4 \right\} \text{ cm}^2 \\ &= \left(96 + \frac{64}{\sqrt{3}} \right) \text{ cm}^2 \end{aligned}$$

Trigonometric Ratios Of Complementary Angles

Consider the following figure.





Here, a right-angled triangle ABC has been shown. In this triangle, suppose that the value of $\sin C$ is $\frac{12}{13}$.

Can we find the value of $\cos A$?

We can use these relations for simplifying the given expression.

For example: Let us express **$\sec 55^\circ - \operatorname{cosec} 89^\circ$** in terms of trigonometric ratios of angles between 0° and 45° .

Now, how can we do so? Let us see.

Since 55° and 35° are complementary angles and also 89° and 1° are complementary angles, we can write 55° as $(90^\circ - 35^\circ)$ and 89° as $(90^\circ - 1^\circ)$.

Therefore,

$$\sec 55^\circ - \operatorname{cosec} 89^\circ = \sec (90^\circ - 35^\circ) - \operatorname{cosec} (90^\circ - 1^\circ)$$

$$= \operatorname{cosec} 35^\circ - \sec 1^\circ$$

$$[\because \sec (90^\circ - A) = \operatorname{cosec} A \text{ and } \operatorname{cosec} (90^\circ - A) = \sec A]$$

$$\therefore \sec 55^\circ - \operatorname{cosec} 89^\circ = \operatorname{cosec} 35^\circ - \sec 1^\circ$$

Let us now solve some more examples involving trigonometric ratios of complementary angles.

Example 1: Find the value of $\sin 53^\circ - \cos 37^\circ$.

Solution:

We know that 53° and 37° are complementary angles as

$$53^\circ + 37^\circ = 90^\circ$$

\therefore We can write 37° as $(90^\circ - 53^\circ)$.

$$\therefore \sin 53^\circ - \cos 37^\circ = \sin 53^\circ - \cos (90^\circ - 53^\circ)$$

$$= \sin 53^\circ - \sin 53^\circ$$

$$[\because \cos (90^\circ - A) = \sin A]$$

$$= 0$$

Thus, the value of $(\sin 53^\circ - \cos 37^\circ)$ is 0.

Example 2: Evaluate $\frac{\operatorname{cosec} 27^\circ}{\sec 63^\circ}$

Solution:

Here, 27° and 63° are complementary angles as $27^\circ + 63^\circ = 90^\circ$

\therefore We can write $27^\circ = 90^\circ - 63^\circ$

Now,

$$\begin{aligned} \frac{\operatorname{cosec} 27^\circ}{\sec 63^\circ} &= \frac{\operatorname{cosec} (90^\circ - 63^\circ)}{\sec 63^\circ} \\ &= \frac{\sec 63^\circ}{\sec 63^\circ} & [\because \operatorname{cosec} (90^\circ - A) = \sec A] \\ &= 1 \end{aligned}$$

Example 3: Prove that $\tan 2A = \cot 3A$, when $A = 18^\circ$.

Solution:

When $A = 18^\circ$,

$$\text{L.H.S} = \tan 2A = \tan (2 \times 18^\circ)$$

$$= \tan 36^\circ$$

$$\text{R.H.S} = \cot 3A = \cot (3 \times 18)$$

$$= \cot 54^\circ$$

54° and 36° are complementary angles.

\therefore We can write 54° as $90^\circ - 36^\circ$.

$$\text{Therefore, } \cot 3A = \cot 54^\circ$$

$$= \cot (90^\circ - 36^\circ)$$

$$= \tan 36^\circ \quad [\because \cot (90^\circ - A) = \tan A]$$

$$\therefore \text{L.H.S} = \text{R.H.S} = \tan 36^\circ$$

$$\therefore \tan 2A = \cot 3A$$

Example 4: If $\sin A = \cos A$, then prove that $A = 45^\circ$.

Solution:

It is given that $\sin A = \cos A$

$$\Rightarrow \sin A = \sin (90^\circ - A)$$

$$[\because \sin (90^\circ - A) = \cos A]$$

$$\Rightarrow A = 90^\circ - A$$

$$\Rightarrow 2A = 90^\circ$$

$$\Rightarrow A = \frac{90^\circ}{2}$$

$$\Rightarrow A = 45^\circ$$

Hence, proved

Example 5: If P, Q, and R are interior angles of a triangle PQR, which is right-angled at Q, then show that

$$\cot\left(\frac{P+R}{2}\right) = \tan \frac{Q}{2}$$

Solution:

Now, P, Q, and R are the interior angles of the triangle PQR. Therefore, their sum should be 180° .

$$\therefore P + R = 180 - Q$$

$$\text{Now, consider the L.H.S.} = \cot\left(\frac{P+R}{2}\right)$$

$$= \cot\left(\frac{180^\circ - Q}{2}\right)$$

$$= \cot\left(90^\circ - \frac{Q}{2}\right)$$

$$= \tan \frac{Q}{2} \quad [\because \cot(90^\circ - A) = \tan A]$$

$$= \text{R.H.S.}$$

$$\therefore \cot\left(\frac{P+R}{2}\right) = \tan \frac{Q}{2}$$

Hence, proved

Example 6: Prove that

$$\tan 1^\circ \times \tan 2^\circ \times \tan 3^\circ \dots \tan 87^\circ \times \tan 88^\circ \times \tan 89^\circ = 1$$

Solution:

Here, 1° and 89° are complementary angles as $1^\circ + 89^\circ = 90^\circ$

Therefore, we can write $89^\circ = 90^\circ - 1^\circ$

Similarly, $88^\circ = 90^\circ - 2^\circ$

$$87^\circ = 90^\circ - 3^\circ$$

$46^\circ = 90^\circ - 44^\circ$ and so on



Now, the L.H.S is

$$\tan 1^\circ \times \tan 2^\circ \times \tan 3^\circ \dots \tan 44^\circ \times \tan 45^\circ \times \tan 46^\circ \dots \tan 87^\circ \times \tan 88^\circ \times \tan 89^\circ$$

$$= \tan 1^\circ \times \tan 2^\circ \times \tan 3^\circ \dots \tan 44^\circ \times \tan 45^\circ \times \tan (90^\circ - 44^\circ) \dots \tan (90^\circ - 3^\circ) \tan (90^\circ - 2^\circ) \tan (90^\circ - 1^\circ)$$

$$= \tan 1^\circ \times \tan 2^\circ \times \tan 3^\circ \dots \tan 44^\circ \times \tan 45^\circ \times \cot 44^\circ \dots \cot 3^\circ \times \cot 2^\circ \times \cot 1^\circ$$

$$[\because \tan (90^\circ - A) = \cot A]$$

$$= \tan 1^\circ \times \tan 2^\circ \times \tan 3^\circ \dots \tan 44^\circ \times \tan 45^\circ \times \frac{1}{\tan 44^\circ} \dots \frac{1}{\tan 3^\circ} \times \frac{1}{\tan 2^\circ} \times \frac{1}{\tan 1^\circ}$$
$$\left[\because \cot A = \frac{1}{\tan A} \right]$$

$$= \tan 45^\circ$$

$$= 1$$

$$= \text{R.H.S}$$

$$\therefore \tan 1^\circ \times \tan 2^\circ \times \tan 3^\circ \dots \tan 87^\circ \times \tan 88^\circ \times \tan 89^\circ = 1$$

Hence, proved

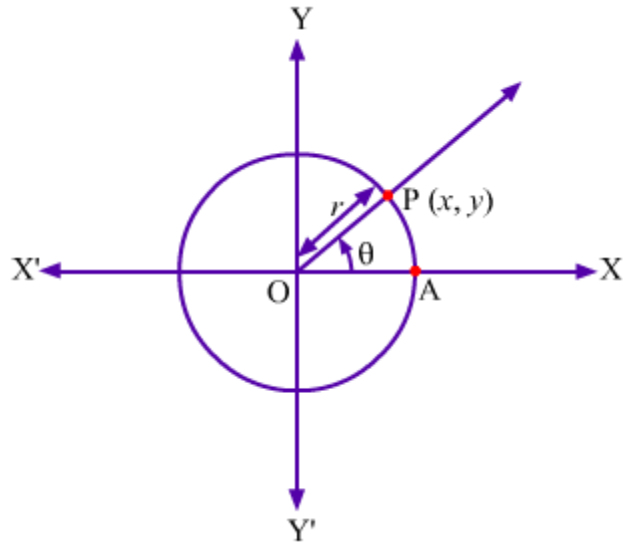
Trigonometric Identities

You have studied various algebraic identities so far. Similarly, we have various trigonometric identities, which are true for all variables.

Now, let us prove these identities.

Let us take a standard circle with radius r such that it intersects the X-axis at point A. Also, let the initial arm OA is rotated in anti-clockwise direction by an angle ?.





In the figure, the terminal arm intersects the circle at point P (x,y) where $x, y \neq 0$ and $OP = r$.

By the definition of trigonometric ratios, we have

$$\sin \theta = \frac{y}{r}, \quad \operatorname{cosec} \theta = \frac{r}{y}$$

$$\cos \theta = \frac{x}{r}, \quad \sec \theta = \frac{r}{x}$$

$$\tan \theta = \frac{y}{x}, \quad \cot \theta = \frac{x}{y}$$

Now, OP is a distance between origin O (0, 0) and point P (x,y) which can be obtained by distance formula as follows:

$$OP = \sqrt{(x-0)^2 + (y-0)^2}$$

$$\Rightarrow r = \sqrt{x^2 + y^2}$$

$$\Rightarrow r^2 = x^2 + y^2 \quad \dots(i)$$

(1) On dividing both sides of the equation (i) by r^2 , we get

$$\frac{r^2}{r^2} = \frac{x^2}{r^2} + \frac{y^2}{r^2}$$

$$\Rightarrow 1 = \left(\frac{x}{r}\right)^2 + \left(\frac{y}{r}\right)^2$$

$$\Rightarrow 1 = \cos^2 \theta + \sin^2 \theta$$

$$\Rightarrow \sin^2 \theta + \cos^2 \theta = 1$$

From this identity, we get two results

$$\text{I. } \sin^2 \theta = 1 - \cos^2 \theta$$

$$\text{II. } \cos^2 \theta = 1 - \sin^2 \theta$$

(2) On dividing both sides of the equation (i) by x^2 ($x \neq 0$), we get

$$\frac{r^2}{x^2} = \frac{x^2}{x^2} + \frac{y^2}{x^2}$$

$$\Rightarrow \left(\frac{r}{x}\right)^2 = 1 + \left(\frac{y}{x}\right)^2$$

$$\Rightarrow \sec^2 \theta = 1 + \tan^2 \theta$$

$$\Rightarrow 1 + \tan^2 \theta = \sec^2 \theta$$

From this identity, we get two results

$$\text{I. } \tan^2 \theta = \sec^2 \theta - 1$$

$$\text{II. } \sec^2 \theta - \tan^2 \theta = 1$$

(3) On dividing both sides of the equation (i) by y^2 ($y \neq 0$), we get

$$\frac{r^2}{y^2} = \frac{x^2}{y^2} + \frac{y^2}{y^2}$$

$$\Rightarrow \left(\frac{r}{y}\right)^2 = \left(\frac{x}{y}\right)^2 + 1$$

$$\Rightarrow \operatorname{cosec}^2 \theta = \cot^2 \theta + 1$$

$$\Rightarrow 1 + \cot^2 \theta = \operatorname{cosec}^2 \theta$$

From this identity, we get two results

$$\text{I. } \cot^2 \theta = \operatorname{cosec}^2 \theta - 1$$

$$\text{II. } \operatorname{cosec}^2 \theta - \cot^2 \theta = 1$$

Corollary:

(i) When $x = 0$ then we have

$$\begin{aligned} \sin \theta &= \frac{y}{r}, & \operatorname{cosec} \theta &= \frac{r}{y} \\ \cos \theta &= \frac{x}{r} = \frac{0}{r} = 0, & \sec \theta &= \frac{r}{x} = \frac{r}{0} (\text{Undefined}) \\ \tan \theta &= \frac{y}{x} = \frac{y}{0} (\text{Undefined}), & \cot \theta &= \frac{x}{y} = \frac{0}{y} = 0 \end{aligned}$$

In this case, the identities $\sin^2 \theta + \cos^2 \theta = 1$ and $1 + \cot^2 \theta = \operatorname{cosec}^2 \theta$ exist but the identity $1 + \tan^2 \theta = \sec^2 \theta$ does not exist.

(ii) When $y = 0$ then we have

$$\begin{aligned} \sin \theta &= \frac{y}{r} = \frac{0}{r} = 0, & \operatorname{cosec} \theta &= \frac{r}{y} = \frac{r}{0} (\text{Undefined}) \\ \cos \theta &= \frac{x}{r}, & \sec \theta &= \frac{r}{x} \\ \tan \theta &= \frac{y}{x} = \frac{0}{x} = 0, & \cot \theta &= \frac{x}{y} = \frac{x}{0} (\text{Undefined}) \end{aligned}$$

In this case, the identities $\sin^2 \theta + \cos^2 \theta = 1$ and $1 + \tan^2 \theta = \sec^2 \theta$ exist but the identity $1 + \cot^2 \theta = \operatorname{cosec}^2 \theta$ does not exist.

Now, we know the basic trigonometric identities, let us see the following video to know how to use these identities.

Example 1: Find the value of the expression $(\sec^2 27^\circ - \tan 27^\circ \cdot \cot 63^\circ)$.

Solution:

$$\sec^2 27^\circ - \tan 27^\circ \cdot \cot 63^\circ = \sec^2 27^\circ - \tan 27^\circ \cdot \cot (90^\circ - 27^\circ)$$

[27° and 63° are complementary angles]

$$= \sec^2 27^\circ - \tan 27^\circ \cdot \tan 27^\circ [\cot (90^\circ - ?) = \tan ?]$$

$$= \sec^2 27^\circ - \tan^2 27^\circ$$

$$= 1 + \tan^2 27^\circ - \tan^2 27^\circ [\text{Using the identity } 1 + \tan^2 \theta = \sec^2 \theta]$$

$$= 1$$

Thus, the value of the given expression is 1.

Example 2: Write all the trigonometric ratios in terms of $\sin A$.

Solution:

Using the identity

$$\sin^2 A + \cos^2 A = 1,$$

we can write, $\cos^2 A = 1 - \sin^2 A$

Taking square root on both sides,

$$\cos A = \sqrt{1 - \sin^2 A} \quad \dots(i)$$

$$\text{Now, } \tan A = \frac{\sin A}{\cos A}$$

$$= \frac{\sin A}{\sqrt{1 - \sin^2 A}} \quad [\text{Using (i)}]$$

$$\Rightarrow \tan A = \frac{\sin A}{\sqrt{1 - \sin^2 A}} \quad \dots(ii)$$

$$\cot A = \frac{1}{\tan A}$$

$$\Rightarrow \cot A = \frac{\sqrt{1 - \sin^2 A}}{\sin A} \quad \dots(\text{iii})$$

$$\sec A = \frac{1}{\cos A}$$

$$\Rightarrow \sec A = \frac{1}{\sqrt{1 - \sin^2 A}} \quad \dots(\text{iv})$$

[Using (i)]

$$\text{and, cosec } A = \frac{1}{\sin A} \quad \dots(\text{v})$$

The trigonometric ratios in terms of $\sin A$ are given by (i), (ii), (iii), (iv), and (v).

Example 3: Simplify the following expression.

$$[(1 + \cot A - \operatorname{cosec} A)(1 + \tan A + \sec A)]$$

Solution:

$$(1 + \cot A - \operatorname{cosec} A)(1 + \tan A + \sec A)$$

$$\begin{aligned} &= \left(1 + \frac{\cos A}{\sin A} - \frac{1}{\sin A}\right) \left(1 + \frac{\sin A}{\cos A} + \frac{1}{\cos A}\right) \\ &= \left(\frac{\sin A + \cos A - 1}{\sin A}\right) \left(\frac{\cos A + \sin A + 1}{\cos A}\right) \\ &= \frac{(\sin A + \cos A)^2 - 1^2}{\sin A \cdot \cos A} \\ &= \frac{\sin^2 A + \cos^2 A + 2 \cdot \sin A \cdot \cos A - 1}{\sin A \cdot \cos A} \\ &= \frac{1 + 2 \cdot \sin A \cdot \cos A - 1}{\sin A \cdot \cos A} = \frac{2 \cdot \sin A \cdot \cos A}{\sin A \cdot \cos A} = 2 \end{aligned}$$

Thus, the value of the given expression is 2.

Use Of Trigonometric Identities In Proving Relationships Involving Trigonometric Ratios

Can we prove the following relation?

$$\sqrt{\frac{\operatorname{cosec} A + 1}{\operatorname{cosec} A - 1}} = \sec A + \tan A$$

To prove this relation, we will make use of the following identities.

$$(i) \sin^2 \theta + \cos^2 \theta = 1$$

$$(ii) 1 + \tan^2 \theta = \sec^2 \theta$$

$$(iii) 1 + \cot^2 \theta = \operatorname{cosec}^2 \theta$$

Let us see how to prove this.

We can take any side, L.H.S or R.H.S, of the above relation and prove it equal to the other side.

$$\text{Now, L.H.S.} = \sqrt{\frac{\operatorname{cosec} A + 1}{\operatorname{cosec} A - 1}}$$

$$= \sqrt{\frac{\operatorname{cosec} A + 1}{\operatorname{cosec} A - 1} \times \frac{\operatorname{cosec} A + 1}{\operatorname{cosec} A + 1}} \quad (\text{by rationalising the denominator})$$

$$= \sqrt{\frac{(\operatorname{cosec} A + 1)^2}{\operatorname{cosec}^2 A - 1}}$$

$$= \sqrt{\frac{(\operatorname{cosec} A + 1)^2}{\cot^2 A}} \quad (\text{Using the identity } 1 + \cot^2 \theta = \operatorname{cosec}^2 \theta)$$

$$= \frac{\operatorname{cosec} A + 1}{\cot A}$$

$$= \sec A + \tan A$$

$$= \text{R.H.S.}$$

$$\text{Thus, } \sqrt{\frac{\operatorname{cosec} A + 1}{\operatorname{cosec} A - 1}} = \sec A + \tan A$$

In this way, we use the above mentioned trigonometric identities to prove other relations involving trigonometric ratios.

Let us now look at another approach to solve a relation.

In this method, we simplify both L.H.S and R.H.S. and when we reach at a common point, we can say that the L.H.S. and R.H.S. are equal.

Let us try to prove that $2\tan^2A + \tan^4A = \sec^4A - 1$.

Taking the L.H.S of the equation,

The L.H.S is given as $2\tan^2A + \tan^4A$.

$$= \tan^2A (2 + \tan^2A)$$

$$= (\sec^2A - 1) (2 + \sec^2A - 1) \text{ [Using the identity } 1 + \tan^2A = \sec^2A, \text{ we obtain } \tan^2A = \sec^2A - 1]$$

$$= (\sec^2A - 1) (\sec^2A + 1)$$

The R.H.S is given by $\sec^4A - 1$.

$$= (\sec^2A - 1) (\sec^2A + 1) [a^2 - b^2 = (a - b) (a + b)]$$

Therefore, by solving both L.H.S and R.H.S, we obtain $(\sec^2A - 1) (\sec^2A + 1)$.

Thus, we can say that $2\tan^2A + \tan^4A = \sec^4A - 1$.

Now let us look at some more examples.

Example 1: Prove that $\frac{1 - \sin A}{\cos A} = \frac{\cos A}{1 + \sin A}$.

Solution:

$$\text{L.H.S} = \frac{1 - \sin A}{\cos A} = \frac{(1 - \sin A)(1 + \sin A)}{\cos A (1 + \sin A)}$$

[Multiplying and dividing by $(1 + \sin A)$]

$$= \frac{1 - \sin^2 A}{\cos A (1 + \sin A)}$$

$$= \frac{\cos^2 A}{\cos A (1 + \sin A)} \quad [\text{Using the identity } \cos^2 A + \sin^2 A = 1]$$

$$= \frac{\cos A}{1 + \sin A}$$

= R.H.S

$$\therefore \frac{1 - \sin A}{\cos A} = \frac{\cos A}{1 + \sin A}$$

Example 2: Prove that $(\operatorname{cosec} A - \sin A)(\sec A - \cos A) = \frac{1}{\tan A + \cot A}$

Solution:

$$\text{L.H.S} = (\operatorname{cosec} A - \sin A)(\sec A - \cos A)$$

$$= \operatorname{cosec} A \times \sec A - \operatorname{cosec} A \times \cos A - \sin A \times \sec A + \sin A \times \cos A$$

$$= \frac{1}{\sin A} \times \frac{1}{\cos A} - \frac{1}{\sin A} \times \cos A - \sin A \times \frac{1}{\cos A} + \sin A \times \cos A$$

$$= \frac{1}{\sin A \times \cos A} - \frac{\cos A}{\sin A} - \frac{\sin A}{\cos A} + \sin A \times \cos A$$

$$= \frac{1 - \cos^2 A - \sin^2 A + \sin^2 A \times \cos^2 A}{\sin A \times \cos A}$$

$$= \frac{1 - 1 + \sin^2 A \times \cos^2 A}{\sin A \times \cos A} \quad [\because \cos^2 A + \sin^2 A = 1]$$

$$= \frac{\sin^2 A \times \cos^2 A}{\sin A \times \cos A}$$

$$= \sin A \times \cos A$$

And R.H.S is given by

$$\frac{1}{\tan A + \cot A} = \frac{1}{\frac{\sin A}{\cos A} + \frac{\cos A}{\sin A}} \quad \left[\because \tan A = \frac{\sin A}{\cos A} \text{ and } \cot A = \frac{\cos A}{\sin A} \right]$$

$$= \frac{1}{\frac{\sin^2 A + \cos^2 A}{\sin A \times \cos A}}$$

$$= \frac{\sin A \times \cos A}{\sin^2 A + \cos^2 A}$$

$$= \sin A \times \cos A \quad [\because \sin^2 A + \cos^2 A = 1]$$

$$\text{Now L.H.S} = \text{R.H.S} = \sin A \times \cos A$$

$$\therefore (\operatorname{cosec} A - \sin A)(\sec A - \cos A) = \frac{1}{\tan A + \cot A}$$